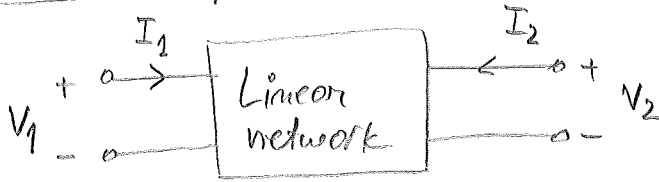


Chapter 17

Two-port Networks

1 Admittance parameters (also known as "the y parameters")



NOTE: For reasons of symmetry it is convenient to assume the passive-sign convention for both ports!

$$\begin{cases} I_1 = y_{11} V_1 + y_{12} V_2 \\ I_2 = y_{21} V_1 + y_{22} V_2 \end{cases}$$

Matrix format:
$$\underbrace{\begin{bmatrix} I_1 \\ I_2 \end{bmatrix}}_{\triangleq I} = \underbrace{\begin{bmatrix} y_{11} & y_{12} \\ y_{21} & y_{22} \end{bmatrix}}_{\triangleq y} \cdot \underbrace{\begin{bmatrix} V_1 \\ V_2 \end{bmatrix}}_{\triangleq V} \Rightarrow \boxed{I = y \cdot V}$$

- y_{11} is the admittance measured at the input port with the terminals of the output port short-circuited ($V_2=0$)

(1)
$$y_{11} = \left. \frac{I_1}{V_1} \right|_{V_2=0} \triangleq \text{"short-circuit input admittance"}$$

(2)
$$y_{12} = \left. \frac{I_1}{V_2} \right|_{V_1=0}$$

(3)
$$y_{21} = \left. \frac{I_2}{V_1} \right|_{V_2=0}$$

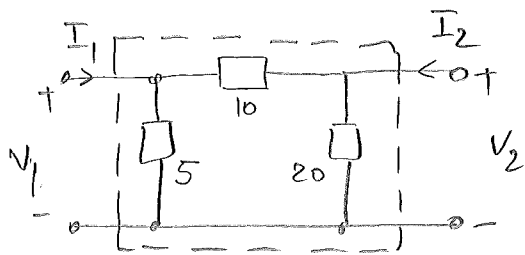
(4)
$$y_{22} = \left. \frac{I_2}{V_2} \right|_{V_1=0} \triangleq \text{"short-circuit output admittance"}$$

All in [S]
Siemens

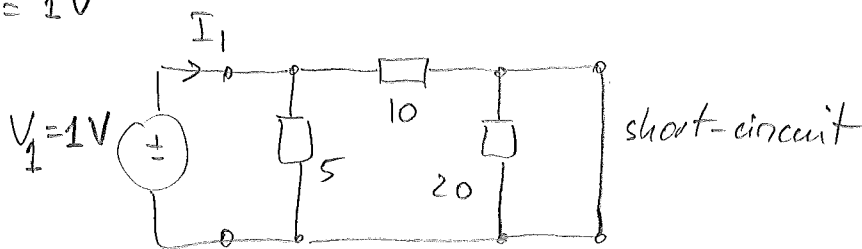
NOTE: It is easier to use equations (1)-(4) when only one parameter is desired! If we need all of them, it's easier to assign V_1, V_2 and solve the circuit with known techniques!

Example Find "y parameters."

(2)



- To determine y_{11} , we short-circuit the output and find the ratio of I_1 and V_1 as shown in equation (1).
- Let $V_1 = 1V$

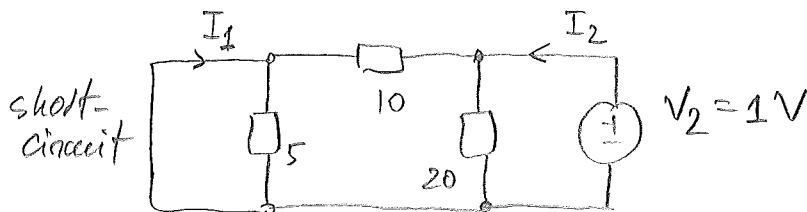


$$V_1 = I_1 \cdot (5 \parallel 10) = I_1 \cdot \frac{5 \cdot 10}{5 + 10}$$

$$\Rightarrow y_{11} = \frac{I_1}{V_1} = \frac{15}{50} = 0.3 \text{ S}$$

$$\boxed{y_{11} = 0.3 \text{ S}}$$

- To determine y_{12} , we short-circuit the input terminals and apply 1V at the output terminals:



$$I_2 = \frac{V_2}{10 \parallel 20} = \frac{10 + 20}{10 \cdot 20} = \frac{30}{200} = \frac{3}{20} \text{ A}$$

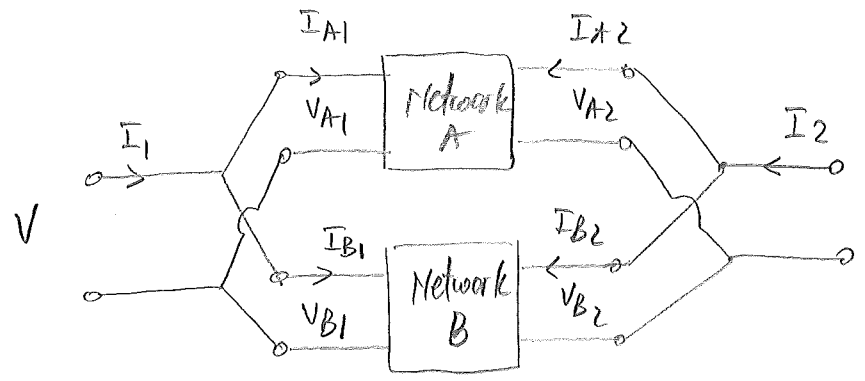
$$I_1 = -\frac{20}{20 + 10} \cdot I_2 = -\frac{2}{3} \cdot \frac{3}{20} \text{ A} = -\frac{1}{10} \text{ A}$$

$$\Rightarrow y_{12} = \frac{I_1}{V_2} = \frac{-\frac{1}{10}}{1} = -0.1 \text{ S}$$

$$\boxed{y_{12} = -0.1 \text{ S}}$$

- By similar methods we can compute: $\boxed{y_{21} = -0.1 \text{ S}}$; $\boxed{y_{22} = 0.15 \text{ S}}$

- y parameters are useful in describing the parallel connection of two-ports!



- Network A:

$$I_A = y_A V_A$$

where $I_A = \begin{bmatrix} I_{A1} \\ I_{A2} \end{bmatrix}$

$$V_A = \begin{bmatrix} V_{A1} \\ V_{A2} \end{bmatrix}$$

- Network B:

$$I_B = y_B V_B$$

where $I_B = \begin{bmatrix} I_{B1} \\ I_{B2} \end{bmatrix}$

$$V_B = \begin{bmatrix} V_{B1} \\ V_{B2} \end{bmatrix}$$

- Note:

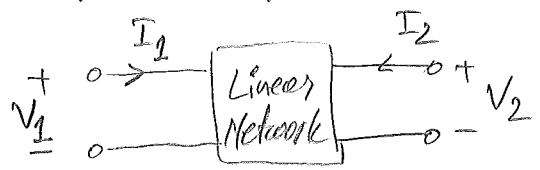
$$V_A = V_B = V$$

$$I = I_A + I_B$$

$$\Rightarrow I = \underbrace{(y_A + y_B)}_{\Delta y} V = y \cdot V$$

- Each y parameter of the parallel network is given as the sum of the corresponding parameters of the individual networks!

2 Impedance parameters (the "z parameters")



$$\begin{cases} V_1 = z_{11} I_1 + z_{12} I_2 \\ V_2 = z_{21} I_1 + z_{22} I_2 \end{cases}$$

Matrix format:

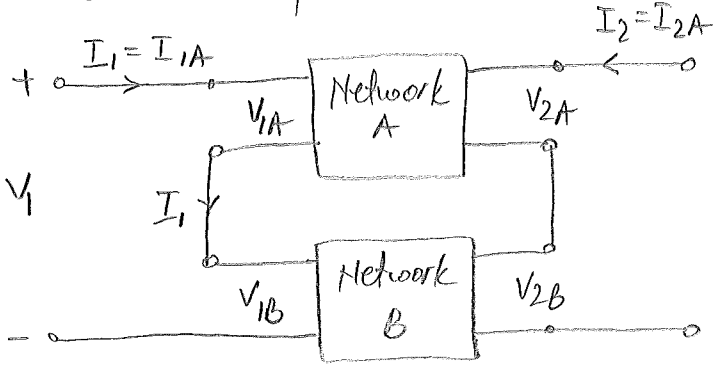
$$\underbrace{\begin{bmatrix} V_1 \\ V_2 \end{bmatrix}}_{\triangleq V} = \underbrace{\begin{bmatrix} z_{11} & z_{12} \\ z_{21} & z_{22} \end{bmatrix}}_{\triangleq z} \cdot \underbrace{\begin{bmatrix} I_1 \\ I_2 \end{bmatrix}}_{\triangleq I} \Rightarrow \boxed{V = z \cdot I}$$

NOTE: It is not necessary that I_1, I_2 or V_1, V_2 be current or voltage sources. They may have any networks terminating the two-port at either end!

$$z_{11} = \frac{V_1}{I_1} \Big|_{I_2=0} \quad z_{12} = \frac{V_1}{I_2} \Big|_{I_1=0} \quad z_{21} = \frac{V_2}{I_1} \Big|_{I_2=0} \quad z_{22} = \frac{V_2}{I_2} \Big|_{I_1=0}$$

↑
open circuit
at output
terminals

- These are "open-circuit impedance parameters"
- z parameters are useful to simplify the problem of a series connection of networks!

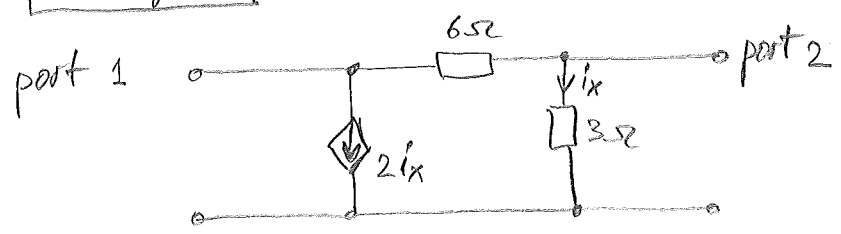


Series connection

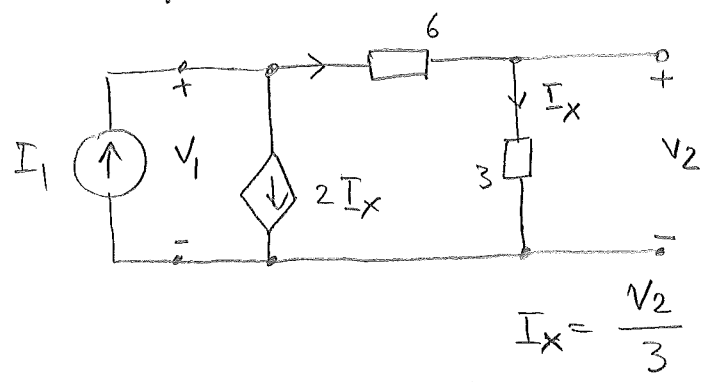
$$\begin{aligned} I &= I_A = I_B \\ V &= V_A + V_B = z_A I_A + z_B I_B \Rightarrow \\ V &= (z_A + z_B) I \\ \boxed{V} &= \boxed{z \cdot I} \end{aligned}$$

where: $\boxed{z = z_A + z_B}$

Example: Find $[z]$ for the circuit:



- To find z_{11} and z_{21} , apply a test current I_1 to port 1 and leave port 2 open-circuited to ensure $I_2 = 0$.

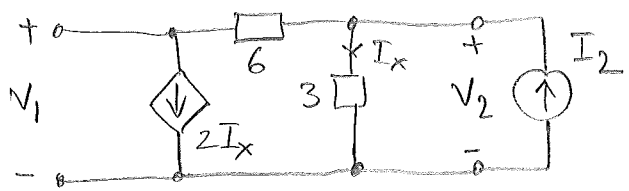


$$I_x = \frac{V_2}{3}$$

$$\begin{cases} I_1 = 2I_x + \frac{V_1 - V_2}{6} = \frac{2}{3}V_2 + \frac{V_1 - V_2}{6} \\ \frac{V_1 - V_2}{6} = I_x = \frac{V_2}{3} \end{cases} \Rightarrow \text{Solve for } V_1, V_2 \text{ in terms of } I_1 \Rightarrow$$

$$\Rightarrow \begin{cases} V_1 = 3I_1 \\ V_2 = 1 \cdot I_1 \end{cases} \Rightarrow \begin{cases} z_{11} = 3 \Omega \\ z_{21} = 1 \Omega \end{cases} \begin{matrix} (1) \\ (2) \end{matrix}$$

- To find z_{12} and z_{22} , apply a test current I_2 to port 2 and leave port 1 open-circuited to ensure $I_1 = 0$.



$$I_x = \frac{V_2}{3} \quad \begin{cases} I_2 = I_x + \frac{V_2 - V_1}{6} = \frac{V_2}{3} + \frac{V_2 - V_1}{6} \\ \frac{V_2 - V_1}{6} = 2I_x = \frac{2}{3}V_2 \end{cases} \Rightarrow \text{Solve to get: } \begin{cases} V_1 = -3I_2 \\ V_2 = 1I_2 \end{cases} \Rightarrow$$

$$\Rightarrow \begin{cases} z_{12} = -3 \Omega \\ z_{22} = 1 \Omega \end{cases} \begin{matrix} (3) (1) \\ (4) (2) \end{matrix} \Rightarrow \text{Finally: } [z] = \begin{bmatrix} 3 & -3 \\ 1 & 1 \end{bmatrix} \Omega$$